


Chapter 7 Test

Name _____

Circle the sets. Write the quotient.

1.



$$\frac{18}{\text{total}} \div \frac{3}{\text{in each set}} = \frac{\quad}{\text{sets}}$$

2.



$$\frac{14}{\text{total}} \div \frac{2}{\text{in each set}} = \frac{\quad}{\text{sets}}$$


3.



$$\frac{12}{\text{total}} \div \frac{3}{\text{in each set}} = \frac{\quad}{\text{sets}}$$

Solve the division equation by completing the related multiplication fact.

4.



$$21 \div 3 = \underline{\quad}$$

$$\underline{\quad} \times \underline{\quad} = \underline{\quad}$$


5.



$$20 \div 4 = \underline{\quad}$$

$$\underline{\quad} \times \underline{\quad} = \underline{\quad}$$

6.



$$15 \div 5 = \underline{\quad}$$

$$\underline{\quad} \times \underline{\quad} = \underline{\quad}$$

7.

$$25 \div 5 = \underline{\quad}$$

$$\underline{\quad} \times \underline{\quad} = \underline{\quad}$$

8.

$$10 \div 5 = \underline{\quad}$$

$$\underline{\quad} \times \underline{\quad} = \underline{\quad}$$

9.

$$16 \div 4 = \underline{\quad}$$

$$\underline{\quad} \times \underline{\quad} = \underline{\quad}$$

Divide. Write the quotient.

If needed, use the *count by* worksheet or counters.

10. $8 \div 2 = \underline{\quad}$

11. $12 \div 2 = \underline{\quad}$

12. $9 \div 3 = \underline{\quad}$

13. $24 \div 4 = \underline{\quad}$

14. $20 \div 5 = \underline{\quad}$

15. $18 \div 2 = \underline{\quad}$

16. $\frac{\square}{2)4}$



17. $\frac{\square}{4)8}$

18. $\frac{\square}{2)14}$



19. $\frac{\square}{1)7}$

Circle the sets. Write the related facts.



20.

<p>24 divided into sets of 3</p> 	<p>8 sets of 3</p> 
$\underline{\quad} \div \underline{\quad} = \underline{\quad}$	$\underline{\quad} \times \underline{\quad} = \underline{\quad}$



21.


<p>10 divided into sets of 5</p> 	<p>2 sets of 5</p> 
$\underline{\quad} \div \underline{\quad} = \underline{\quad}$	$\underline{\quad} \times \underline{\quad} = \underline{\quad}$

22.

<p>12 divided into sets of 3</p> 	<p>4 sets of 3</p> 
$\underline{\quad} \div \underline{\quad} = \underline{\quad}$	$\underline{\quad} \times \underline{\quad} = \underline{\quad}$

23.

<p>6 divided into sets of 2</p> 	<p>3 sets of 2</p> 
$\underline{\quad} \div \underline{\quad} = \underline{\quad}$	$\underline{\quad} \times \underline{\quad} = \underline{\quad}$



Solve and label.

24. Leah placed 30 pictures in her new scrapbook. She carefully put 5 photos on each page. How many pages did she use?

25. Jonas collected 15 orange leaves and 6 green leaves for his science project. How many total leaves did he collect?